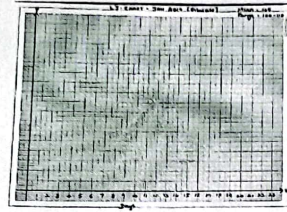
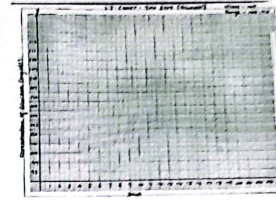


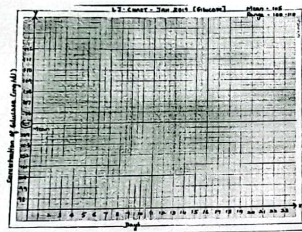
Levey-Jennings Chart (Example Glucose Test)




1. Mark dates on X-axis



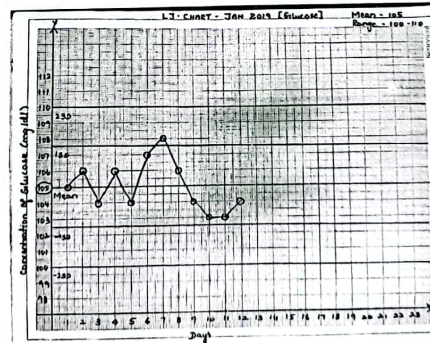
2. Mark Glucose concentration on Y-axis



3. Draw a line for the mean value



4. Draw a line for the 1 SD & 2 SD value including -2SD



Plot the values of the IQC in the LJ Chart